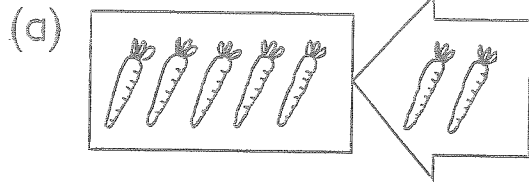



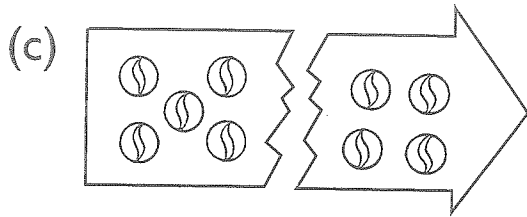
6. Add or subtract.




$$5 + 2 = \underline{\quad}$$



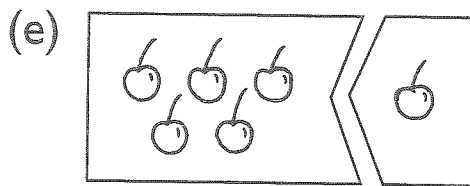
$$6 + 3 = \underline{\quad}$$



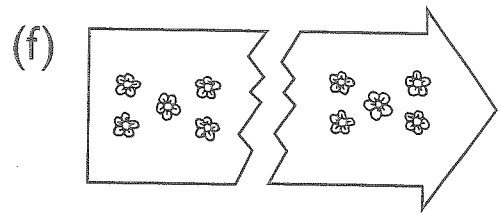
$$9 - 4 = \underline{\quad}$$



$$8 - 2 = \underline{\quad}$$



$$5 + 1 = \underline{\quad}$$



$$10 - 5 = \underline{\quad}$$

7. Write '+' or '-' in each \bigcirc .

(a) $8 \bigcirc 7 = 1$

(b) $3 \bigcirc 7 = 10$

(c) $6 \bigcirc 3 = 9$

(d) $9 \bigcirc 9 = 0$

(e) $10 \bigcirc 2 = 8$

(f) $7 \bigcirc 2 = 9$

(g) $5 \bigcirc 1 = 4$

(h) $10 \bigcirc 8 = 2$