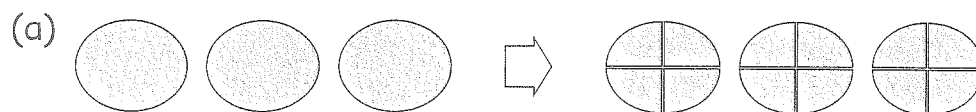


## EXERCISE 7

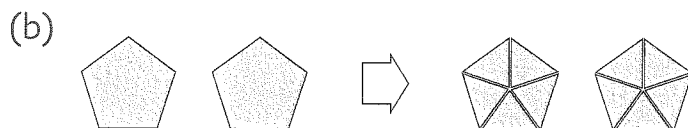
1. Divide. Then use the pictures to check your answers.



$$3 \div \frac{1}{4} = 3 \times 4$$

$$=$$

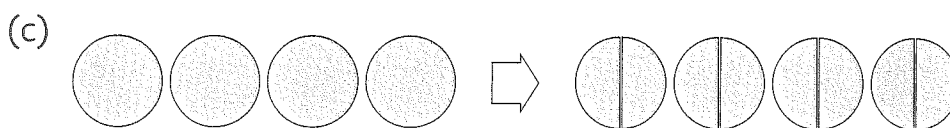
3 wholes can be divided into \_\_\_\_\_ quarters.



$$2 \div \frac{1}{5} = 2 \times$$

$$=$$

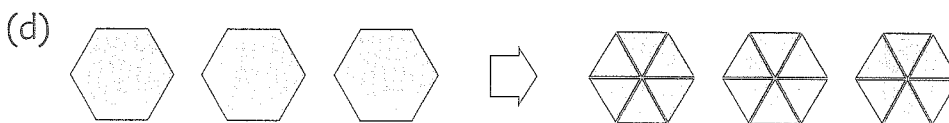
2 wholes can be divided into \_\_\_\_\_ fifths.



$$4 \div \frac{1}{2} = 4 \times$$

$$=$$

4 wholes can be divided into \_\_\_\_\_ halves.



$$3 \div \frac{1}{6} = 3 \times$$

$$=$$

3 wholes can be divided into \_\_\_\_\_ sixths.